

www.mrc-papers.com



CLASSIFIED

International Examinations Papers

Mob: +974 55249797 / 55258711

E-mail: rashed.saba@gmail.com

MATHEMATIC A
TOPIC- GEOMETRY
(3D Shapes & Volume)

22 $ABCDEFGH$ is a cuboid.

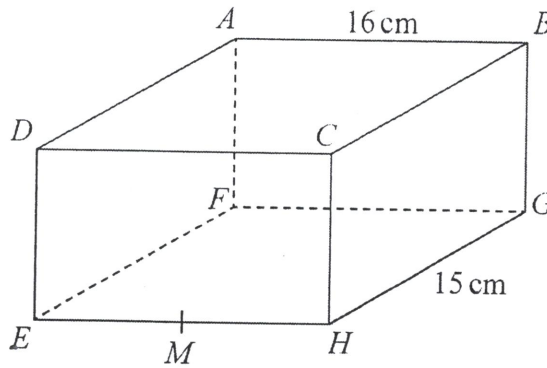


Diagram NOT
accurately drawn

$AB = 16$ cm and $HG = 15$ cm.

M is the midpoint of EH .

BM makes an angle of 24° with the base $EFGH$.

Calculate the height, BG , of the cuboid.

Give your answer correct to 3 significant figures.



..... cm

(Total for Question 22 is 4 marks)



MAKING THE WORLD A BETTER PLACE

MAKING THE WORLD A BETTER PLACE

MAKING THE WORLD A BETTER PLACE

4 The diagram shows a cuboid and a triangular prism.

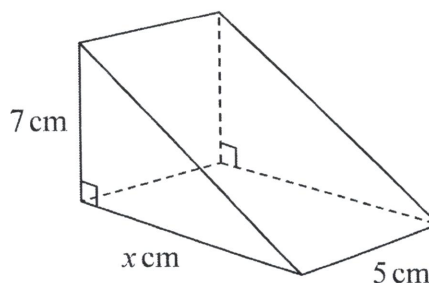
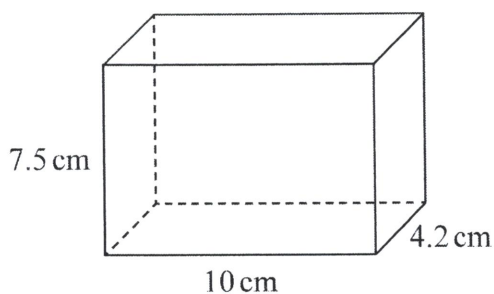


Diagram NOT accurately drawn

The volume of the cuboid is equal to the volume of the triangular prism.

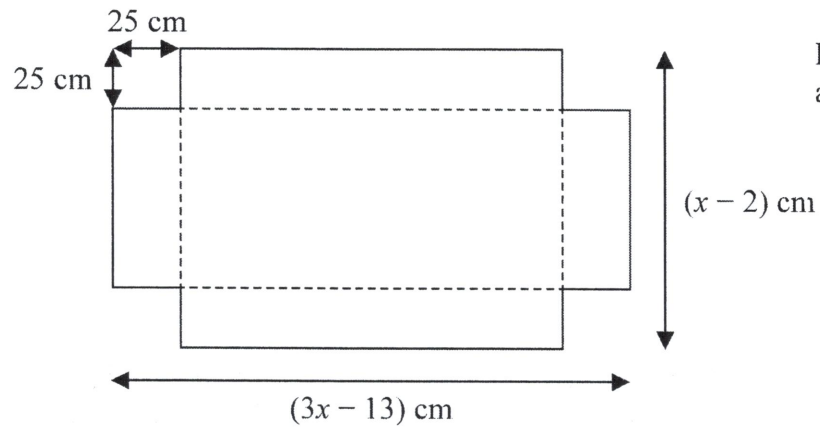
Work out the value of x .




(Total for Question 4 is 4 marks)



- 21 A rectangular piece of card has length $(3x - 13)$ cm and width $(x - 2)$ cm.
A square, with sides of length 25 cm, is removed from each corner of the card.



The card is then folded along the dashed lines to make an open box with height 25 cm as shown below.



- (a) Show that the length of the open box is $(3x - 63)$ cm.

(1)



The volume of the open box is $81\,900\text{ cm}^3$

- (b) Find the value of x .
Show clear algebraic working.



$x =$

(5)

(Total for Question 21 is 6 marks)

TOTAL FOR PAPER IS 100 MARKS



11

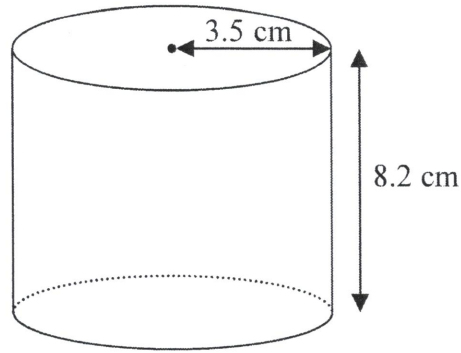


Diagram NOT
accurately drawn



A solid cylinder has radius 3.5 cm and height 8.2 cm.

Work out the **total** surface area of the cylinder.
Give your answer correct to 3 significant figures.

..... cm²

(Total for Question 11 is 3 marks)



19 The diagram shows a solid cone.

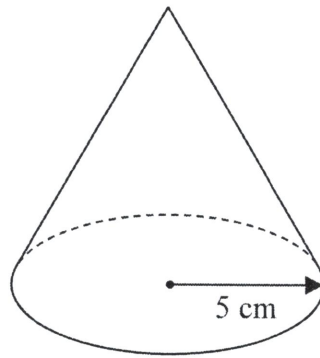


Diagram NOT
accurately drawn

The radius of the base of the cone is 5 cm.
The total surface area of the cone is $90\pi \text{ cm}^2$

Work out the volume of the cone.
Give your answer as a multiple of π .



..... cm^3

(Total for Question 19 is 5 marks)



23 The diagram shows a solid hemisphere.

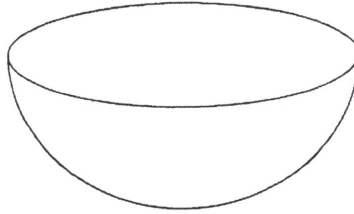


Diagram NOT
accurately drawn

The hemisphere has a **total** surface area of $\frac{16}{3}\pi \text{ cm}^2$

The hemisphere has a volume of $k\pi \text{ cm}^3$

Find the value of k .



(Total for Question 23 is 4 marks)

TOTAL FOR PAPER IS 100 MARKS



DO NOT WRITE IN THIS AREA