

- 1 Insert **one pair** of brackets only to make the following statement correct.


$$6 + 5 \times 10 - 8 = 16$$

[1]

- 2 Calculate $\frac{8.24 + 2.56}{1.26 - 0.72}$.

Answer [1]

3



Write down the order of rotational symmetry of this shape.

Answer [1]

- 4 (a) Write down two whole numbers that have a product of -15 .

Answer(a) and [1]

- (b) During one year, the temperature in Ulaanbaatar varied from -33°C to 27°C .

Find the range of the temperatures during that year.

Answer(b) $^{\circ}\text{C}$ [1]

- 5 Work out the value of $3^4 \div 3^{-2}$.
Give your answer as an ordinary number.

Answer [2]

- 6 Indira measures the length, l centimetres, of her desk as 95.6 cm, correct to the nearest millimetre.
Complete the statement about the value of l .

Answer $\leq l <$ [2]

- 7 (a) Complete the following list of factors of 30.

1, 2,, 5,, 10,, 30

[1]

- (b) Write down the prime factors of 30.

Answer(b) [1]

- 8 (a) Write 640 000 in standard form.

Answer(a) [1]

- (b) Write 7.82×10^{-4} as an ordinary number.

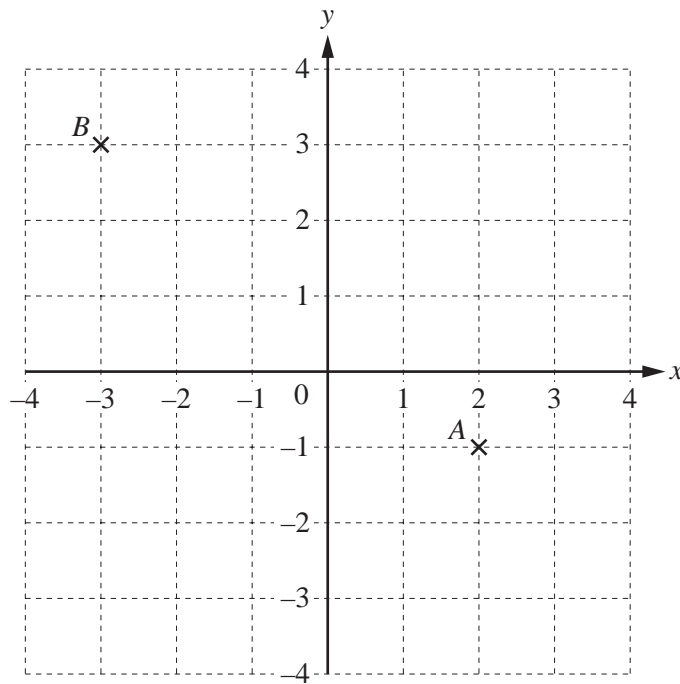
Answer(b) [1]

9 Make y the subject of the formula.

$$8 + 5y - 3x = 0$$

Answer $y = \dots\dots\dots$ [2]

10



Points A and B are shown on the grid.

(a) Write \vec{AB} as a column vector.

$$\text{Answer(a) } \vec{AB} = \begin{pmatrix} \\ \end{pmatrix} \quad [1]$$

(b) Write $3\vec{AB}$ as a column vector.

$$\text{Answer(b) } 3\vec{AB} = \begin{pmatrix} \\ \end{pmatrix} \quad [1]$$

11 Write the following in order of size, starting with the smallest.

$$\frac{15}{37} \quad 0.41 \quad 40.4\% \quad \frac{17}{42}$$

Answer < < < [2]

12 (a) Simplify $5k - 7k + 4k$.

Answer(a) [1]

(b) Find the value of $8x - 3y$ when $x = -2$ and $y = -5$.

Answer(b) [2]

13 For her holiday, Alyssa changed 2800 Malaysian Ringgits (MYR) to US dollars (\$) when the exchange rate was 1 MYR = \$0.325 .

At the end of her holiday she had \$210 left.

(a) How many dollars did she spend?

Answer(a) \$..... [2]

(b) She changed the \$210 for 750 MYR.

What was the exchange rate in dollars for 1 MYR?

Answer(b) 1 MYR = \$..... [1]

- 14 Without using a calculator, work out $1\frac{1}{6} \div \frac{7}{8}$.

Show all your working and give your answer as a fraction in its lowest terms.

Answer [3]

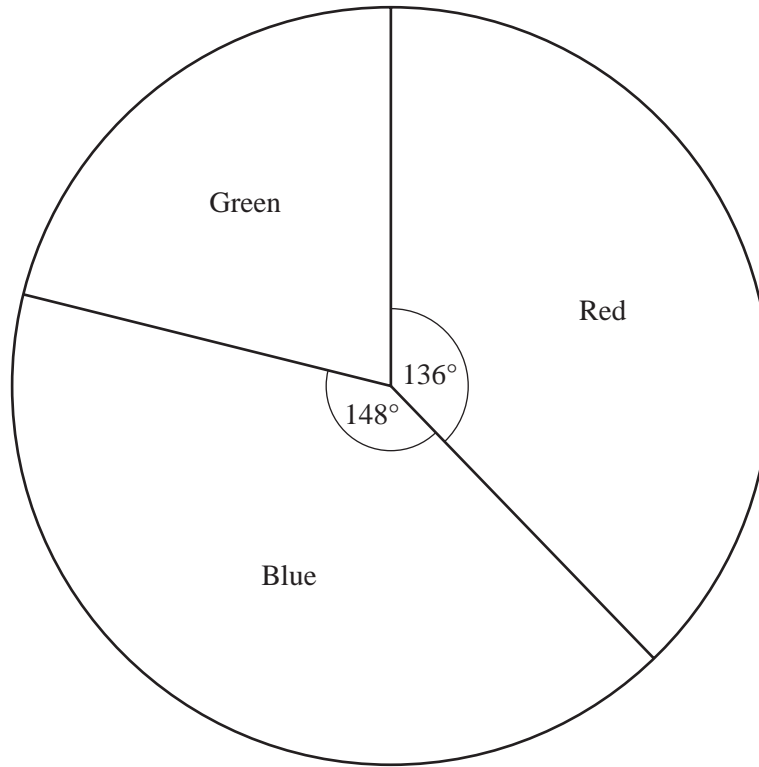
- 15 Solve the simultaneous equations.
You must show all your working.

$$\begin{aligned}9x + 2y &= 8 \\5x + 6y &= -20\end{aligned}$$

Answer $x =$

$y =$ [3]

- 16** A bag contains different coloured counters.
Sasha takes a counter at random, records its colour, and replaces it.
She does this 90 times and records her results in the pie chart below.



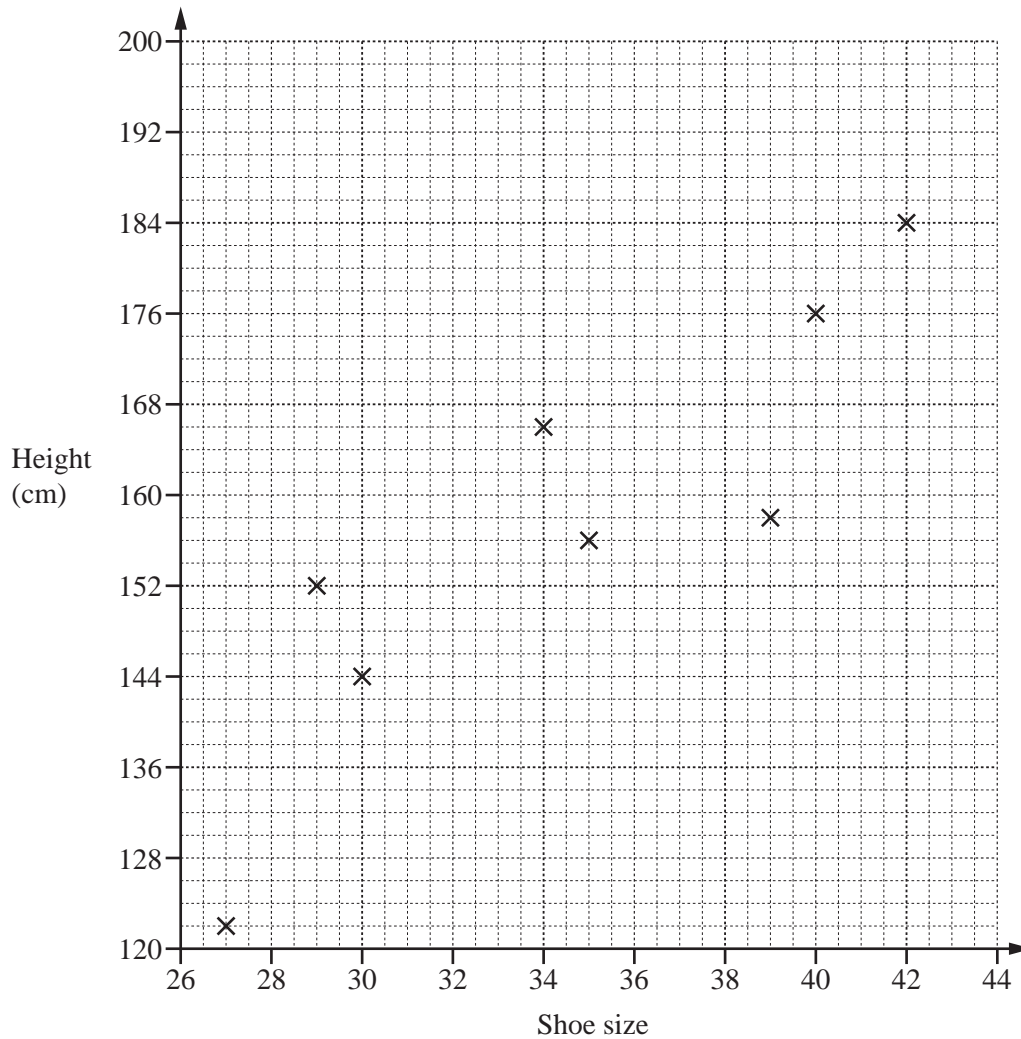
- (a) Write down the relative frequency of Sasha choosing a red counter.

Answer(a) [1]

- (b) Work out the number of times a green counter is chosen.

Answer(b) [3]

17 The scatter diagram shows the results of height plotted against shoe size for 8 people.



(a) Four more results are recorded.

Shoe size	28	31	38	43
Height (cm)	132	156	168	198

Plot these 4 results on the scatter diagram.

[2]

(b) Draw a line of best fit on the scatter diagram.

[1]

(c) What type of correlation is shown by the scatter diagram?

Answer(c) [1]

18 Find

(a) the cube root of 729,

Answer(a) [1]

(b) the two square roots of 225,

Answer(b) and [2]

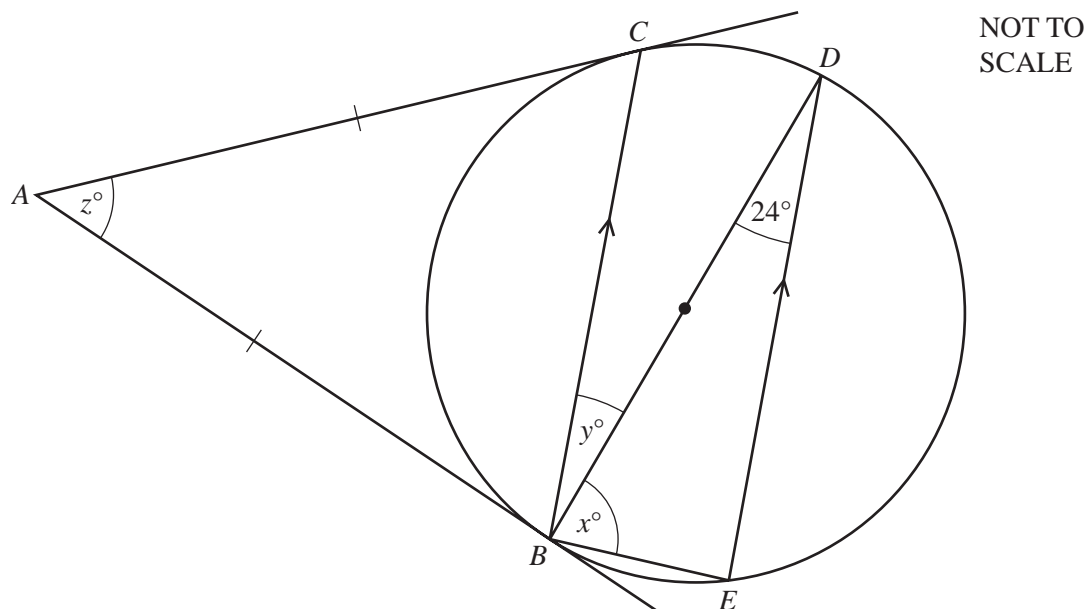
(c) a common multiple of 6 and 9,

Answer(c) [1]

(d) $(-4)^2$.

Answer(d) [1]

19



The points B, C, D and E lie on a circle.
 AB and AC are equal length tangents to the circle.
 BD is a diameter of the circle and BC is parallel to ED .
 Angle $BDE = 24^\circ$.

Calculate the value of

(a) x ,

Answer(a) $x =$ [2]


(b) y ,

Answer(b) $y =$ [1]

(c) z .

Answer(c) $z =$ [2]

- 20 The diagram shows the plan, $ABCD$, of a park.
The scale is 1 centimetre represents 20 metres.



Scale: 1 cm to 20 m

- (a) Find the actual distance BC .

Answer(a) m [2]

- (b) A fountain, F , is to be placed

- 160 m from C
- and
- equidistant from AB and AD .

On the diagram, **using a ruler and compasses only**, construct and mark the position of F .
Leave in all your construction lines.

[5]

BLANK PAGE

Permission to reproduce items where third-party owned material protected by copyright is included has been sought and cleared where possible. Every reasonable effort has been made by the publisher (UCLES) to trace copyright holders, but if any items requiring clearance have unwittingly been included the publisher will be pleased to make amends at the earliest possible opportunity.

Cambridge International Examinations is part of the Cambridge Assessment Group. Cambridge Assessment is the brand name of University of Cambridge Local Examinations Syndicate (UCLES), which is itself a department of the University of Cambridge.