



UNIVERSITY OF CAMBRIDGE INTERNATIONAL EXAMINATIONS  
International General Certificate of Secondary Education

CANDIDATE  
NAME

CENTRE  
NUMBER

--	--	--	--	--

CANDIDATE  
NUMBER

--	--	--	--

\* 6 3 4 0 8 5 6 7 2 4 \*



**BIOLOGY**

**0610/02**

Paper 2 Core

**October/November 2007**

**1 hour 15 minutes**

Candidates answer on the Question Paper.

No Additional Materials are required.

**READ THESE INSTRUCTIONS FIRST**

Write your Centre number, candidate number and name on all the work you hand in.

Write in dark blue or black pen.

You may use a pencil for any diagrams or graphs.

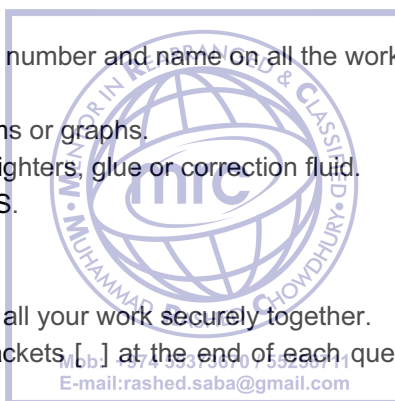
Do not use staples, paper clips, highlighters, glue or correction fluid.

**DO NOT WRITE IN ANY BARCODES.**

Answer **all** questions.

At the end of the examination, fasten all your work securely together.

The number of marks is given in brackets [ ] at the end of each question or part question.



For Examiner's Use	
1	
2	
3	
4	
5	
6	
7	
8	
9	
<b>Total</b>	

This document consists of **17** printed pages and **3** blank pages.



- 1 Non-living things, such as a truck, have features that seem to be similar to those of living organisms.

For Examiner's Use

Choose words from the list of characteristics of living things and match them to the statements about a truck.

**excretion**

**growth**

**movement**

**nutrition**

**respiration**

**sensitivity**

A truck needs to have a supply of diesel put into its fuel tank, similar to the need for ..... in animals. When this fuel is burnt exhaust fumes are removed, like the process of ..... in animals. Energy is released when this fuel is burnt. This matches the process of ..... in both animals and plants. This energy is used to turn the wheels of the truck, like the process of ..... in animals.

[4]

[Total: 4]



- 2 (a) Fig. 2.1 shows the mean height of females from birth to 25 years of age.

For  
Examiner's  
Use

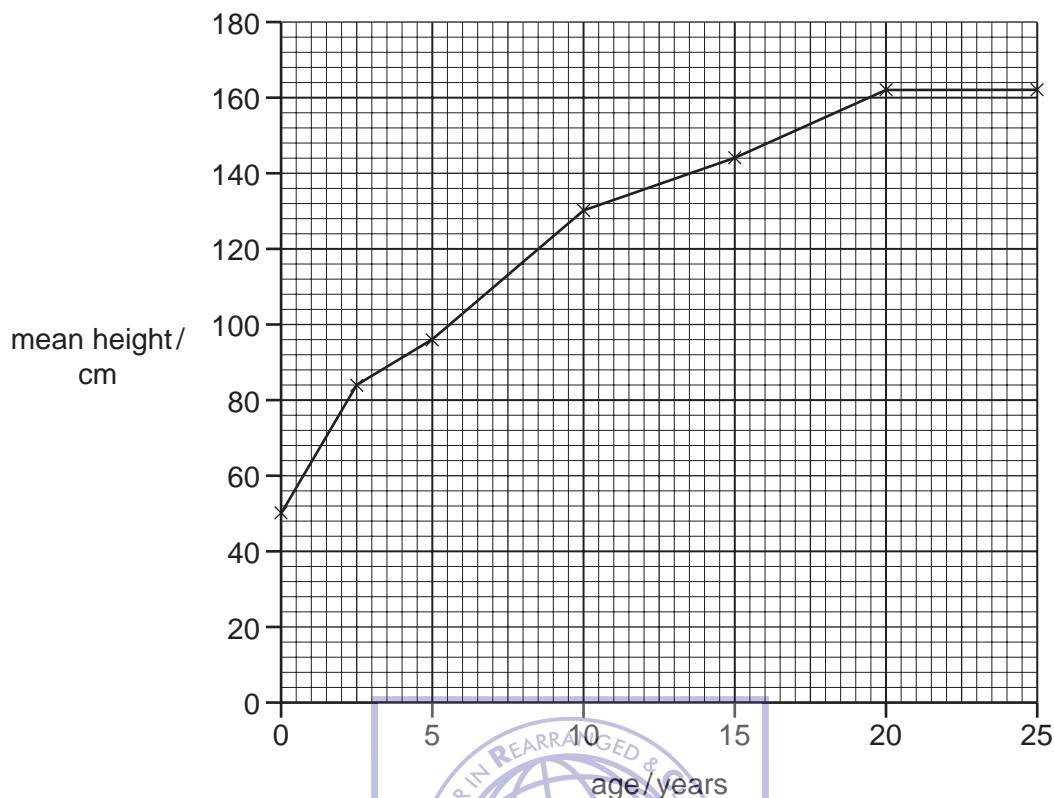


Fig. 2.1

- (i) State in which two year period the growth rate of **females** is most rapid.

..... [1]

Moh: +974 55373670 / 55258711  
E-mail: rashed.saba@gmail.com

Table 2.1 lists similar information about males.

Table 2.1

age of males / years	mean height / cm
0	50
2	84
5	104
10	126
15	140
20	174
25	178

- (ii) Plot the data for males on the graph, Fig. 2.1, using the same axes.

[3]

- (iii) After the age of 2, at which two ages are the heights of males and females the same?

..... and ..... [2]

(b) During the teenage years of both sexes changes happen to their bodies and their behaviour.

For  
Examiner's  
Use

(i) State in which sex these changes normally occur first.

..... [1]

(ii) Describe three of these changes that happen in males.

1. ....

.....

2. ....

.....

3. ....

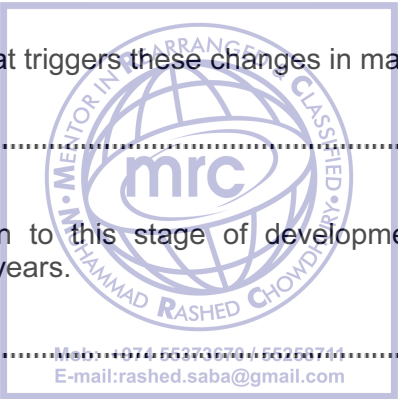
..... [3]

(iii) Name the hormone that triggers these changes in males.

..... [1]

(iv) State the name given to this stage of development that happens during the teenage (adolescent) years.

..... [1]



[Total: 12]

3 Fig. 3.1 shows part of the female reproductive system during pregnancy.

For  
Examiner's  
Use

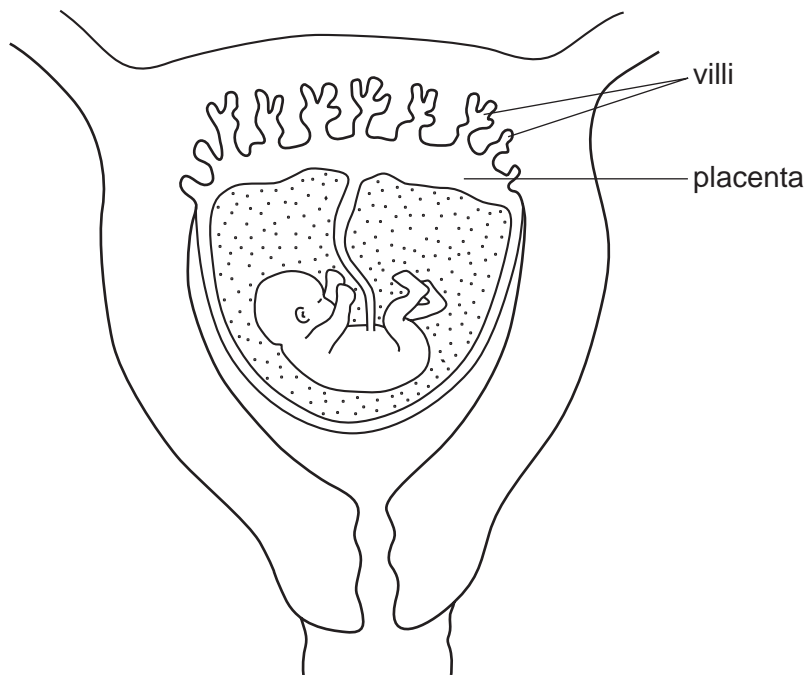


Fig. 3.1

(a) (i) One function of the placenta is to allow food materials to pass from the mother's blood to that of the fetus.

State two other functions of the placenta.

1. ....  
.....

2. ....  
..... [2]

(ii) The surface of the placenta has a large number of finger-like projections called villi. These extend into the surface of the uterus.

Explain the importance of these villi.

.....  
.....  
..... [2]

(b) On Fig. 3.1 mark with an X a place where the mother's blood and the blood of the fetus are close together.

[1]

(c) The blood supply of the mother and the fetus are separate. Suggest three reasons why this is important for the fetus.

1. ....

.....

2. ....

.....

3. ....

..... [3]

[Total: 8]



- 4 Fig. 4.1 shows changes in the concentration of oxygen in a river into which untreated sewage is being released.

For Examiner's Use

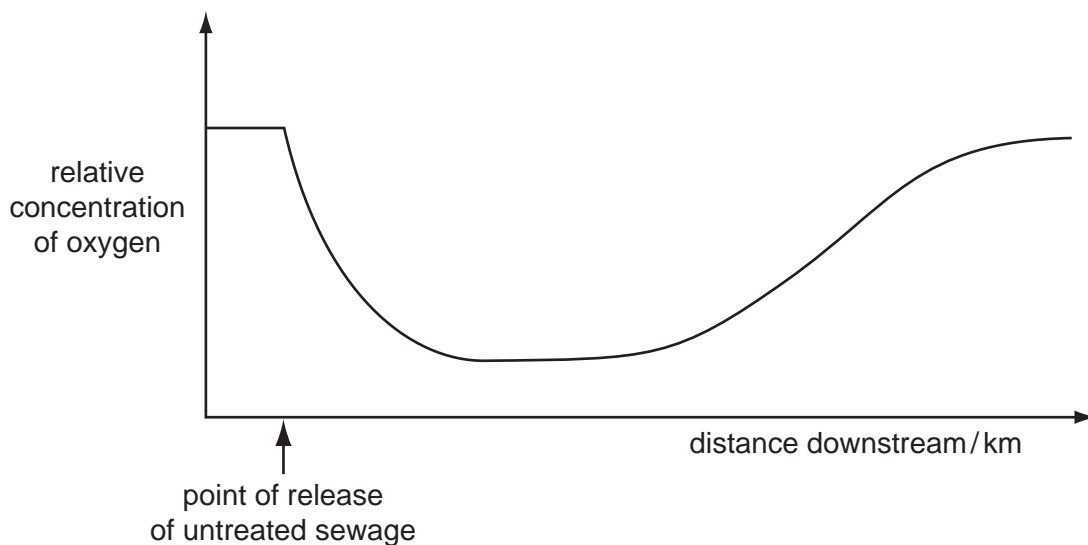


Fig. 4.1

- (a) Describe the changes in oxygen concentration shown by the graph.

.....

.....

..... [2]

- (b) Suggest how these changes in the concentration of oxygen have been produced.

.....

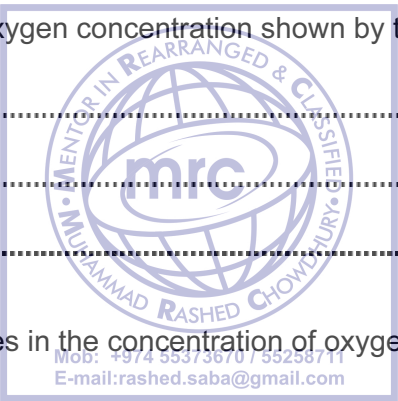
.....

.....

.....

..... [4]

[Total: 6]



5 Fig. 5.1 shows a food web.

For  
Examiner's  
Use

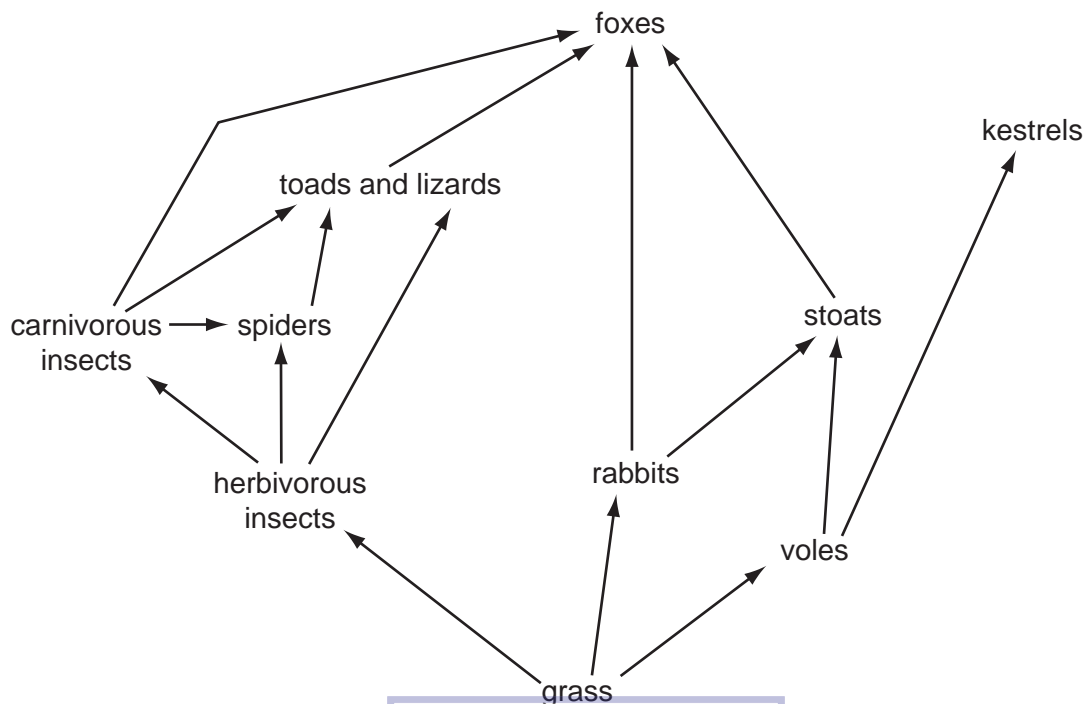


Fig. 5.1

(a) (i) Complete the food chain from this food web.



[1]

(ii) Complete each column of Table 5.1 by naming **two** appropriate organisms from the food web. Some organisms could occur in more than one column.

Table 5.1

consumer	carnivore	herbivore

[3]



- (b) The overuse of some pesticides can make the eggs of birds of prey, such as the kestrel, infertile. This may cause a large decrease in the population of kestrels.

For Examiner's Use

Predict and explain the possible effects this could have on populations of stoats and rabbits in the food web, Fig. 5.1.

stoats .....

.....

.....

rabbits .....

.....

..... [4]

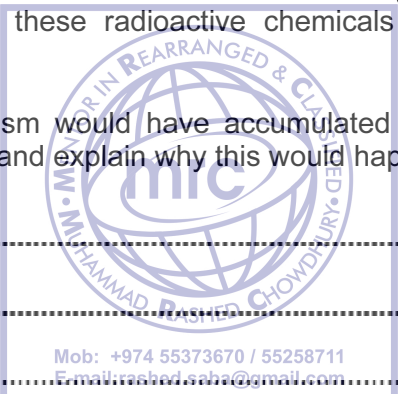
- (c) About 20 years ago a failure at a nuclear plant resulted in the release of radioactive material into the atmosphere. The radioactive material was deposited on grasslands over parts of Europe. Some of the radioactive chemicals got into organisms in the food web, Fig. 5.1. Not all of these radioactive chemicals taken in by organisms are excreted.

- (i) Suggest which organism would have accumulated the highest concentration of radioactive chemicals and explain why this would happen.

organism .....

explanation .....

.....



..... [3]

- (ii) One of the radioactive chemicals present was strontium, which behaves very much like calcium in an animal's body. Suggest where this strontium would be found in high levels in an animal's body.


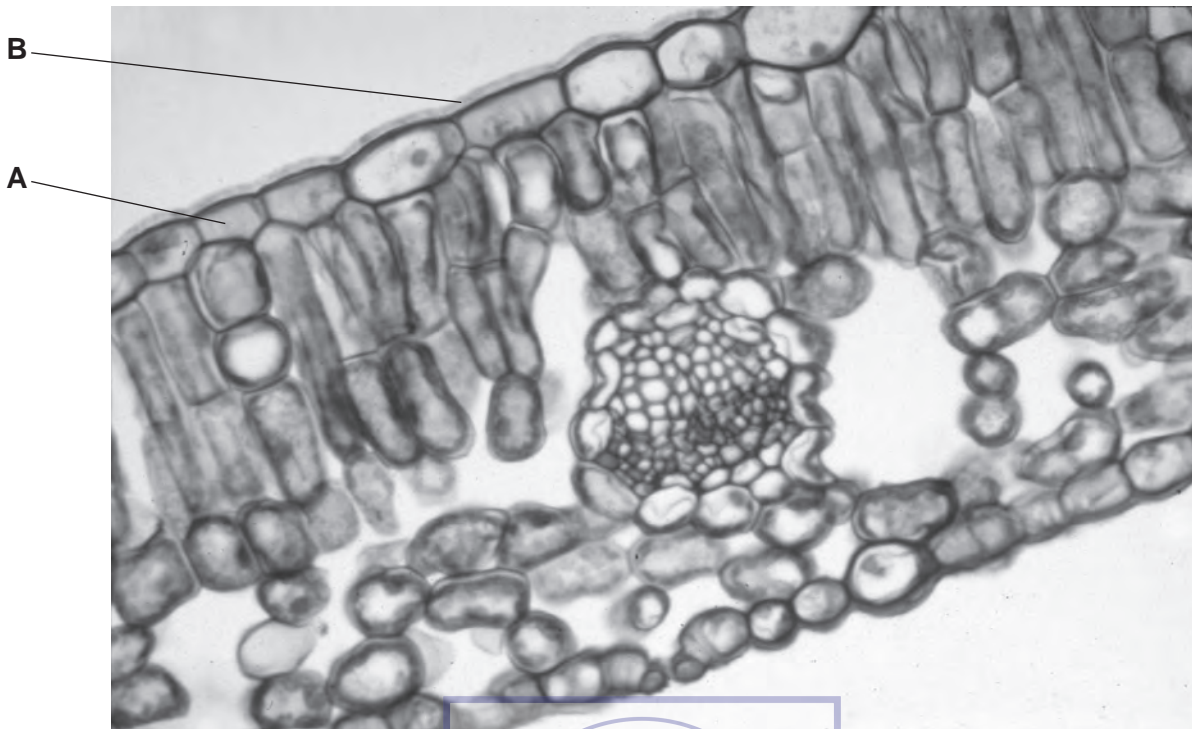
.....

..... [1]

[Total: 12]

6 Fig. 6.1 shows a section through a leaf.

For  
Examiner's  
Use



(a) Name the parts of the leaf labelled A and B.

A .....

B ..... [2]

(b) One function of a leaf is gaseous exchange.

(i) Name the process by which gases move in or out of a leaf.  
..... [1]

(ii) On Fig. 6.1 label the stoma. [1]

- (iii) Complete Table 6.1 by placing a tick (✓) in the appropriate column to show the movement of gases or vapour through open stomata on a sunny, dry day. Give a reason for each of your answers.

For  
Examiner's  
Use

**Table 6.1**

	movement of gas or vapour			reason for movement of gas or vapour
	into leaf	out of leaf	none	
<b>carbon dioxide</b>				
<b>oxygen</b>				
<b>water vapour</b>				

[3]

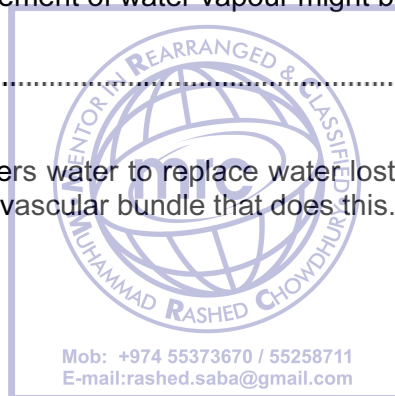
- (iv) Suggest how the movement of water vapour might be different if it was raining.

..... [1]

- (c) The vascular bundle delivers water to replace water lost by the leaf. On Fig. 6.1 name and label the tissue in the vascular bundle that does this.

[2]

[Total: 10]



7 (a) Describe how alcohol is produced by respiration of microorganisms during brewing.

.....  
.....  
.....  
..... [3]

(b) Describe the possible effects that alcohol has on the human body.

.....  
.....  
.....  
..... [3]

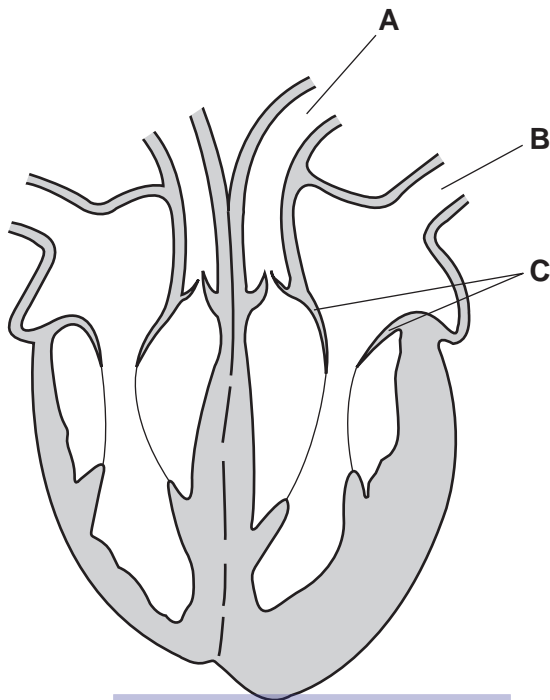
[Total: 6]



For  
Examiner's  
Use

8 (a) Fig. 8.1 shows a section through the heart.

For  
Examiner's  
Use



**Fig. 8.1**

MENTOR IN REARRANGED & CLASSIFIED  
 info  
 MUHAMMAD RASHED CHOWDHURY  
 Mob: +974 55373670 / 55258711  
 E-mail: rashed.saba@gmail.com

(i) Name the two blood vessels labelled **A** and **B**.

**A** .....

**B** ..... [2]

(ii) Name valve **C** and state its function.

name .....

function .....

..... [2]

(b) Fig. 8.2 shows the volume of oxygenated blood pumped out of the left ventricle per minute when the body is at rest and during exercise.

For  
Examiner's  
Use

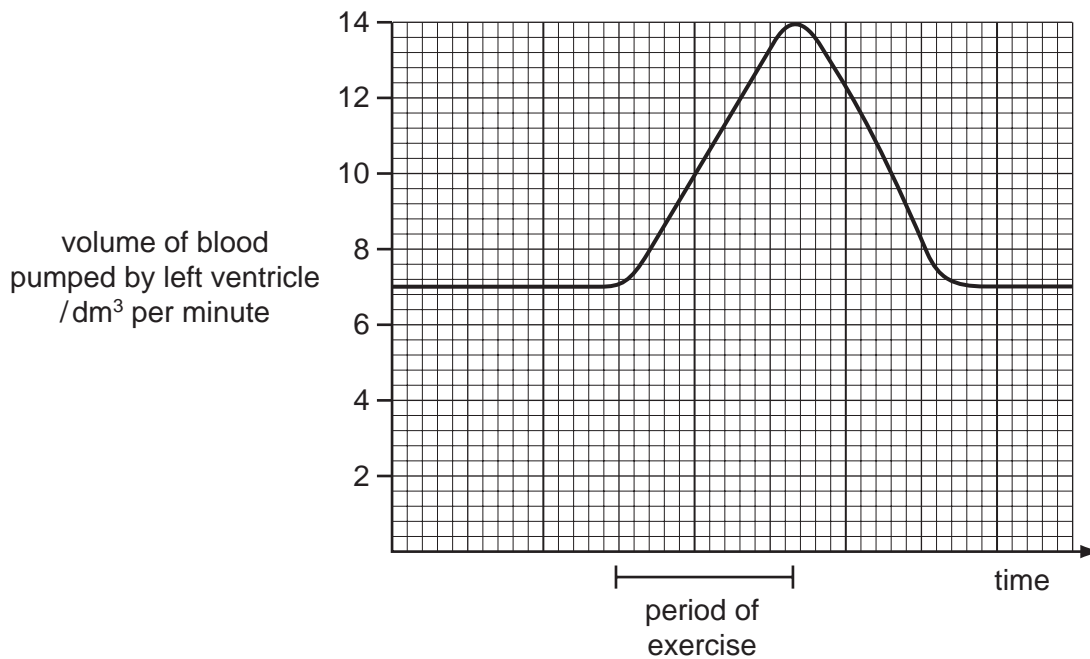


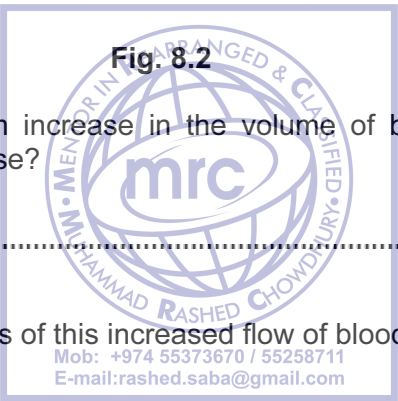
Fig. 8.2

(i) What is the maximum increase in the volume of blood pumped out of the left ventricle during exercise?

..... [1]

(ii) Explain the advantages of this increased flow of blood during exercise.

.....  
.....  
.....  
.....  
..... [4]



(c) Fig. 8.3 shows an external view of the heart.

For  
Examiner's  
Use

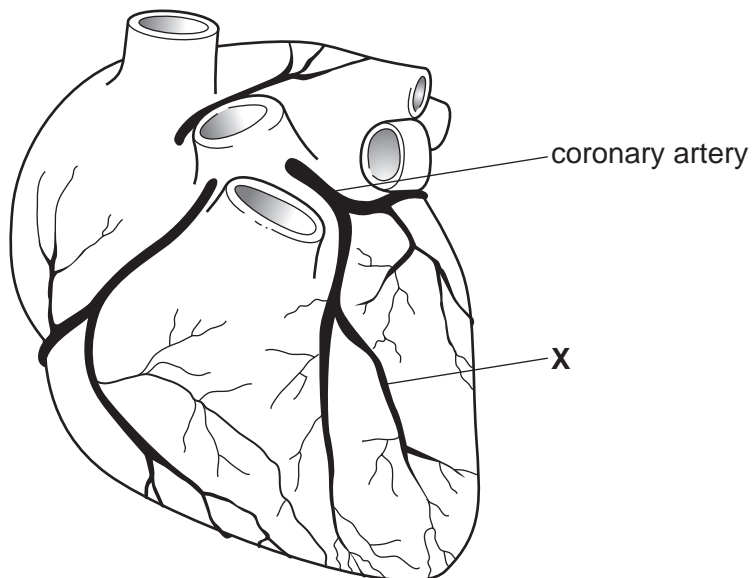


Fig. 8.3

(i) If the coronary artery becomes blocked at X, suggest what the effect would be on the heart.

.....

.....

..... [2]

(ii) State two ways in which the risk of such a blockage could be reduced.

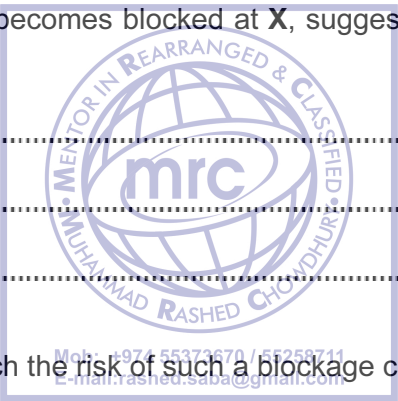
1. ....

.....

2. ....

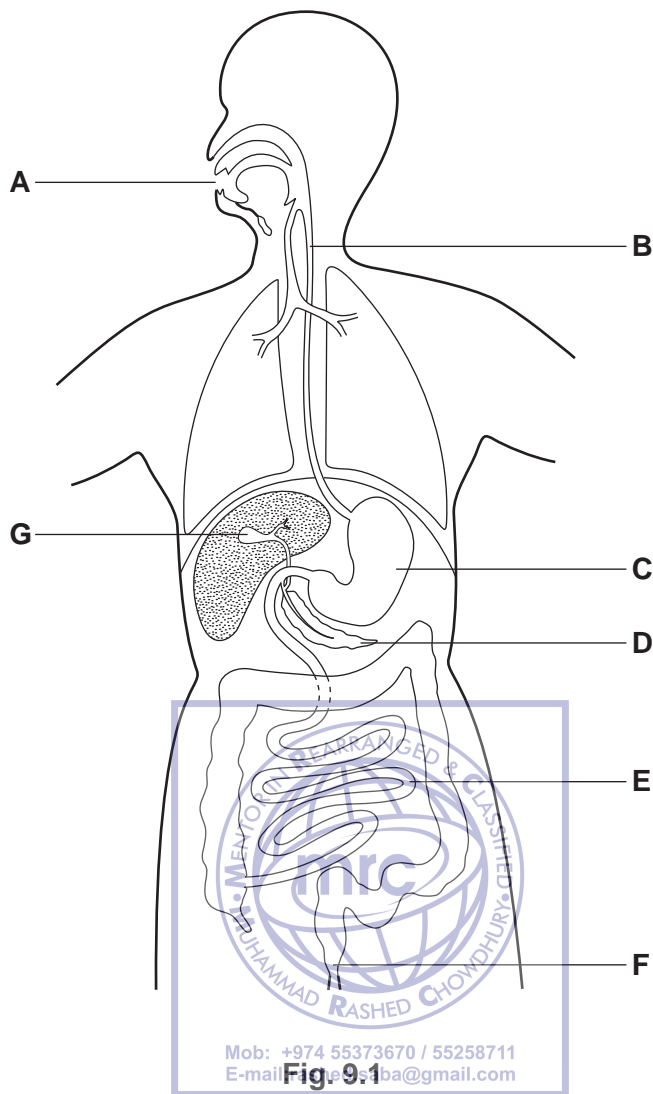
..... [2]

[Total: 13]



9 Fig. 9.1 shows the digestive system.

For  
Examiner's  
Use





(a) Complete the following statements by selecting the appropriate letter from Fig. 9.1.

(i) Egestion happens at ..... [1]

(ii) Pancreatic juice is formed at ..... [1]

(iii) Villi are present at ..... [1]

(iv) Bile is stored at ..... [1]

(b) The stomach produces hydrochloric acid as well as enzymes. State two functions of this acid in the stomach.


1 .....  
.....

2 ..... [2]  
.....

(c) Describe the roles of the liver in digestion and assimilation.

..... [3]  
.....  
.....

[Total: 9]



**BLANK PAGE**



**BLANK PAGE**



## BLANK PAGE



---

*Copyright Acknowledgements:*

Question 6

Fig. 6.1 © Dr Lawrence Jensen, University of Auckland.

Permission to reproduce items where third-party owned material protected by copyright is included has been sought and cleared where possible. Every reasonable effort has been made by the publisher (UCLES) to trace copyright holders, but if any items requiring clearance have unwittingly been included, the publisher will be pleased to make amends at the earliest possible opportunity.

University of Cambridge International Examinations is part of the Cambridge Assessment Group. Cambridge Assessment is the brand name of University of Cambridge Local Examinations Syndicate (UCLES), which is itself a department of the University of Cambridge.